

Year 4 - Tuesday 28th April

Weekly Spellings

international

intergalactic

interrupt

interject

intervene

intercept

intertwine

Look up the first 4 words in a dictionary and write the definition.

Reading

Read for at least 20 minutes.

English

Now it's time to write your dilemma story!

Use your plan from yesterday to write the introduction - you need to set the scene. Introduce your character, explain where they are and why they are going diving. Describe the journey to the ocean and describe getting into the water.

Next paragraph: start the middle part. Describe the setting - use your plan and your words from the videos last week to describe what is like in the ocean, including the animals and the surroundings.

DO NOT GO ANY FURTHER

You can write in the 1st person (about you) or the 3rd person (about someone else).

Write in the past tense.

Try to include a balance of action, speech and description.

Try to include some subordinate clauses with a comma.

Maths

Please follow the link to the White Rose website.

<https://whiterosemaths.com/homelearning/year-4/>

We have done tenths before so most of this is revision - please complete Week 1 lesson 2 (tenths as decimals) and Week 1 lesson 3 (tenths on a place value grid).

I want to whizz through Week 1 so we can reach Week 2 where we have new learning.

French

Watch the Power Point - time to the hour and half hour.

Fill in the sheet below. (Scroll down).

e.g. Il est une heure et demie.

Il est deux heures.


PSHE

Watch the video in the link


<https://www.bbc.co.uk/teach/class-clips-video/religious-education-ks2-my-life-my-religion-ramadan-and-eid-ul-fitr/zdv7pg8>

Have a go at any of the ideas in the Teachers Notes underneath. If you want to make a video, I would love to see it! Email it to the class email.

Underneath each clock, write how you would say the time in French.




Il est _____



Il est _____



Il est _____




Il est _____



Il est _____



Il est _____



Il est _____



Il est _____

heure

heures

et demie

une

deux

trois

quatre

cinq

six

sept

huit

neuf

dix

onze

douze