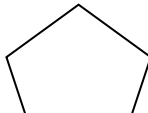
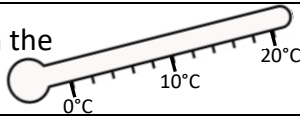
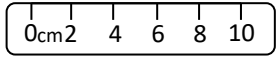
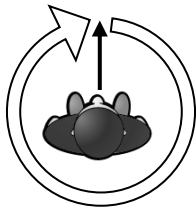
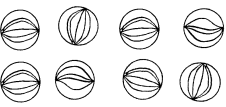
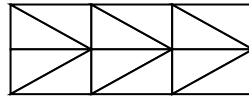


Name: _____

Date: _____

Class/Group: _____

A: Place Value, Add and Subtract		B: Multiply, Divide and Fractions		C: Measure and Geometry	
1. What is 100 more than this number? 247	3:1	11. $16 \div 8 =$	3:10	23. A cake weighs 2 kilograms. It is cut into 4 equal pieces. How many grams does each piece weigh?	3:19
2. What is the 8 worth in this number? 384	3:2	12. $3 \times 4 =$	3:10		
3. Write < or > to make this correct: 694 <input type="text"/> 294	3:3	13. $45 \times 4 =$	3:11	22. What is the perimeter of this 	3:20
4. Show 12°C on the thermometer. 	3:4	14. There are 3 girls for every 2 boys. If there are 15 girls, how many boys?	3:12	regular pentagon? 	
5. Make the smallest number possible using the digits 4 1 and 3 .	3:5	15. What is one tenth of 5?	3:13	23. Ian turns through a full turn. How many degrees has he turned through? 	3:26
6. $310 - 1 =$	3:6	16. Circle $\frac{1}{4}$ of the marbles. 	3:14		
7. $792 - 538 =$	3:7	17. What is $\frac{5}{8}$ of 32?	3:15	24. Draw an angle that is bigger than a right angle.	3:27
8. Circle the best estimate to $452 - 89$: 330 340 350 360	3:8	18. $\frac{1}{3} = \frac{?}{12}$ 	3:16		
9. A school has 650 tickets to sell for a play. They sell 478. How many left?	3:9	19. Add the fractions. $\frac{3}{8} + \frac{1}{8}$	3:17	25. Draw a pair of parallel lines.	3:28
10. What is the missing number? $57 + $ <input type="text"/> $- 23 = 95$	3:9	20. Write the largest fraction. $\frac{1}{9} \quad \frac{1}{5} \quad \frac{1}{7} \quad \frac{1}{8}$	3:18		
Total (A)		Total (B)		Total (C)	
Test Total (A+B+C)		R (0-9)	Y (10-19)	G (20-25)	