

## Daily Learning Tasks

### English

#### **What is a recount?**



We will be looking at recounts today. During Spring one, we wrote a first-person recount so you will be able to apply knowledge that we have already learnt.

Like the 'White Rose', follow the link or copy and paste into the search bar to access the lesson. Read the instructions carefully. It will tell you what to read, write, answer and watch.

<https://www.bbc.co.uk/bitesize/articles/zkpvbdm>

If you have any problems please email, I am at my laptop from 8:30am. Please let me know your opinion of the BBC bitesize English.

[year3@woodstone.leics.sch.uk](mailto:year3@woodstone.leics.sch.uk)

### Spellings:

Copy the following words to practice handwriting and then put them into a sentence.

**Spelling pattern – (suffixe ly – change y to i)**

[happily](#), [angrily](#), [easily](#), [greedily](#), [readily](#)

## Maths

### **1. Division facts games**

<https://www.topmarks.co.uk/maths-games/hit-the-button>

Focus on dividing by 4 and dividing by 8 this week.

### **2. Quick Maths with Reasoning**

Look at the question below. Solve it in the quickest way possible and explain your method.

$$137-233=$$

### **3. Basic Skills Test**

As part of our maths lessons, we complete 'Key Skills Tests'. The children should be very familiar with these.

Please see slides 3 and 4 for the test and answers.

Keep a track of your weekly score to see if you are improving. Ask an adult to go through a couple of errors with you so you understand where you went wrong.



## Compulsory Topic Task

### Geography

Today will be our last lesson looking at rainforests. We have learnt so much, such as where they are in the world, how they are made and the animals that live there.

Today's task will look at the weather. Read the power point 'Rainforest Climate' which is attached to the home learning. You may also want to conduct your own research on climate.



Your task is to write a post card pretending you are there. Remember to describe the weather and draw on any other facts that you have learnt.

There is a template on slide 5.

Send your postcards to:

[year3@woodstone.leics.sch.uk](mailto:year3@woodstone.leics.sch.uk)



### Grammar

Complete the grammar mat on slide 6.

You can mark your own questions using the answers on slide 7.

## Optional Extended Task

### Getting Helpful

We are getting ready for half term next week!

I would like to see you helping adults around the home! This could be by:

- Tidying your bedroom
- Tidying another room
- Hoovering
- Helping with dinner
- Gardening


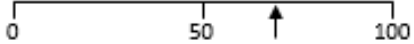




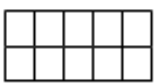









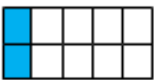

It's always nice for parents to know how much you appreciate them so lets see you share a helping hand!

Send me pictures of you helping to:

[year3@woodstone.leics.sch.uk](mailto:year3@woodstone.leics.sch.uk)



A: Place Value, Add and Subtract		B: Multiply, Divide and Fractions		C: Measure and Geometry	
1. What is the missing number? 0 50 100 <input type="text"/> 200 250	3:1	11. $40 \div 8 =$	3:10	23. The cup holds 250 millilitres of liquid. The jug holds 1 litre of liquid. How many more millilitres <u>does</u> the jug hold?	3:19
2. What is the 7 worth in this number? 347	3:2	12. $9 \times 8 =$	3:10		
3. Write this number in words. 602	3:3	13. $18 \times 3 =$	3:11	22. Tom bought 3 cans of pop that were 75p each. How much did they cost in total? Give your answer in pounds and pence.	3:21
4. Estimate the labelled number? 	3:4	14. I buy 5 packs of balloons. I have 45 balloons. How many are in each pack?	3:12		
5. Write a number that is bigger than 793 using the same three digits.	3:5	16. Circle $\frac{1}{10}$ of the marbles. 	3:13	23. What time does this clock <u>show</u> ? 	3:22
6. $302 - 10 =$	3:6	16. What fraction is shaded? 	3:14		
7. $752 - 93 =$	3:7	17. What is $\frac{1}{6}$ of 18?	3:15	24. How many right angles make a complete turn? 	3:27
8. Circle the best <b>estimate</b> to $98 + 131$ 220 230 240 250	3:8	18. This shape is in tenths. Shade in $\frac{1}{5}$ . 	3:16		
9. Use $12 + 25 = 37$ to help solve: $370 - 120 =$ <input type="text"/>	3:9	19. Add the fractions. $\frac{2}{7} + \frac{3}{7}$	3:17	25. Circle the horizontal line. 	3:28
10. What is the missing number? $182 - \square = 124$	3:9	20. Write the smallest fraction. $\frac{1}{5}$ $\frac{1}{6}$ $\frac{1}{4}$ $\frac{1}{2}$	3:18		
Total (A)		Total (B)		Total (C)	
Test Total (A+B+C)		R (0-9)	Y (10-19)	G (20-25)	

A: Place Value, Add and Subtract		B: Multiply, Divide and Fractions		C: Measure and Geometry	
1. What is the missing number? 0 50 100 <input type="text"/> 200 250	3:1 <b>150</b>	11. $40 \div 8 =$	3:10 <b>5</b>	23. The cup holds 250 millilitres of liquid. The jug holds 1 litre of liquid. How many more millilitres <u>does</u> the jug hold?	3:19 <b>750</b>
2. What is the 7 worth in this number? 347	3:2 <b>7 units</b>	12. $9 \times 8 =$	3:10 <b>72</b>		
3. Write this number in words. 602	3:3 Six hundred and two	13. $18 \times 3 =$	3:11 <b>54</b>	22. Tom bought 3 cans of pop that were 75p each. How much did they cost in total? Give your answer in pounds and pence.	3:21 <b>£2 and 25p</b>
4. Estimate the labelled number? 	3:4 <b>60-75</b>	14. I buy 5 packs of balloons. I have 45 balloons. How many are in each pack?	3:12 <b>9</b>		
5. Write a number that is bigger than 793 using the same three digits.	3:5 <b>937 or 973</b>	16. Circle $\frac{1}{10}$ of the marbles. 	3:13 <b>1</b>	23. What time does this clock <u>show</u> ? 	3:22 <b>5 (minutes) past 3</b>
6. $302 - 10 =$	3:6 <b>292</b>	16. What fraction is shaded? 	3:14 $\frac{3}{12}$ or $\frac{1}{4}$		
7. $752 - 93 =$	3:7 <b>659</b>	17. What is $\frac{1}{6}$ of 18?	3:15 <b>3</b>	24. How many right angles make a complete turn? 	3:27 <b>4</b>
8. Circle the best <b>estimate</b> to $98 + 131$ 220 <u>230</u> 240 250	3:8 <b>230</b>	18. This shape is in tenths. Shade in $\frac{1}{5}$ . 	3:16 <b>2 parts</b>		
9. Use $12 + 25 = 37$ to help solve: $370 - 120 =$ <input type="text"/>	3:9 <b>250</b>	19. Add the fractions. $\frac{2}{7} + \frac{3}{7}$	3:17 $\frac{5}{7}$	25. Circle the horizontal line. 	3:28 <b>Left line circled</b>
10. What is the missing number? $182 - \square = 124$	3:9 <b>58</b>	20. Write the smallest fraction. $\frac{1}{5}$ $\frac{1}{6}$ $\frac{1}{4}$ $\frac{1}{2}$	3:18 $\frac{1}{6}$		
Total (A)		Total (B)		Total (C)	
Test Total (A+B+C)		R (0-9)	Y (10-19)	G (20-25)	



---

---

---

---

---

# Year 3 Autumn Term 1 SPaG Mat

2

## Section 1

Choose the best conjunction to fill the gap in each sentence:

- a. Mrs French will not be a happy teacher \_\_\_\_\_ Class 10 are badly behaved again today.
- b. Josie will be allowed to play outside \_\_\_\_\_ she has finished her homework.
- c. The boys received a bravery award \_\_\_\_\_ they saved the man from drowning.

## Section 4

Look at the picture. Can you write a past tense sentence about it that contains an adjective and a conjunction?



## Section 2

Mr Whoops has accidentally jumbled up TWO adverbs. Can you help him to unjumble them?


yafesl \_\_\_\_\_

tiequyl \_\_\_\_\_



## Section 5

Write a list sentence about the items Ben packed into his car boot to go camping. Make sure commas are in the correct places.



## Section 3

Add -er and -est suffixes to these root words:

safe \_\_\_\_\_


early \_\_\_\_\_

sad \_\_\_\_\_

## Section 6

Can you up-level this sentence by adding an expanded noun phrase, an adverb, a conjunction and extra detail?

The boy lay under his duvet.





# Year 3 Autumn Term 1 SPaG Mat

## Section 1

Choose the best conjunction to fill the gap in each sentence:

- a. Mrs French will not be a happy teacher **if** Class 10 are badly behaved again today.
- b. Josie will be allowed to play outside **after, when** she has finished her homework.
- c. The boys received a bravery award **because, as, since** they saved the man from drowning.

## Section 4

Look at the picture. Can you write a past tense sentence about it that contains an adjective and a conjunction?  
**Accept any appropriate past tense sentence, e.g. The boy walked across the clean floor.**

## Section 2

Mr Whoops has accidentally jumbled up TWO adverbs. Can you help him to unjumble them?

yafesl **safely**


tiequyl **quietly**



## Section 5

Write a list sentence about the items Ben packed into his car boot to go camping. Make sure commas are in the correct places.

**Accept any list sentence with correct comma use, e.g. Ben filled the car boot with a sleeping bag, a tent, a camping stove and his rucksack.**



## Section 3

Add -er and -est suffixes to these root words:

safe **safer safest**

early **earlier earliest**

sad **sadder saddest**

## Section 6

Can you up-level this sentence by adding an expanded noun phrase, an adverb, a conjunction and extra detail?

The boy lay under his duvet.

**Any appropriate sentence with an expanded noun phrase and either a co-ordinating or subordinating conjunction added with additional detail, e.g. The extremely tired boy lay under his duvet after having a tiring day.**

